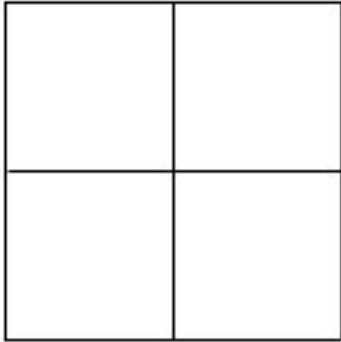


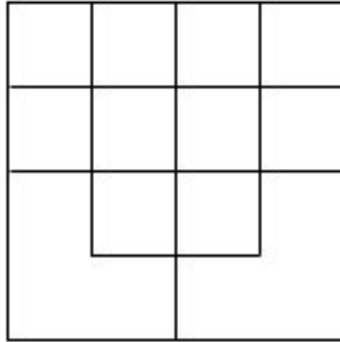
# Shape Counting

puzzle 1



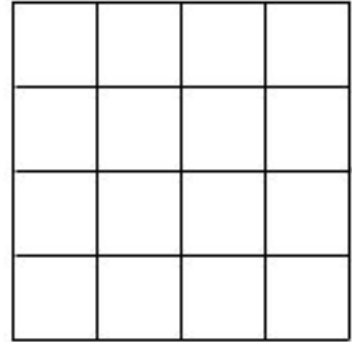
how many  
squares can  
you count?

puzzle 2



how many  
squares can  
you count?

puzzle 3



how many  
squares can  
you count?

*HINTS:*

*puzzle 1: There are more than 4 squares*

*puzzle 2: There are more than 10 squares*

*puzzle 3: There are more than 20 squares*